








Lesson – 2 The world of green Worksheet

I. Choose the correct answer

1. Which of the following is not an example of a taproot system?
 - a. coriander plant
 - b. chilli plant
 - c. oak tree
 - d. grass
2. Rose, hibiscus, and cotton are examples for _____ based on the similarities of their stems
 - a. herbs
 - b. shrubs
 - c. trees
 - d. climbers
3. Which of the following types of plants have a weak stem, cannot grow upright on their own and depend on other structures for support?
 - a. creepers
 - b. climbers
 - c. herbs
 - d. shrubs
4. Which of the following statements is valid for herbs?
 - a. They have a hard woody stem with branches
 - b. They have a weak stem that cannot grow upright without support
 - c. They have a thin, slender, and green stem
 - d. They have a weak stem that can creep on the ground
5. Which of the following is not true about trees?
 - a. They are usually tall
 - b. They have a thick, woody, and strong stem
 - c. They need support to grow upright
 - d. Mango, neem, and coconut are examples of trees

II. Match the following

S.no.	Column A	Column B
1		Shrub
2		Climber
3		Creeper
4		Fibrous root
5		Tree
6		Herb
7		Tap root